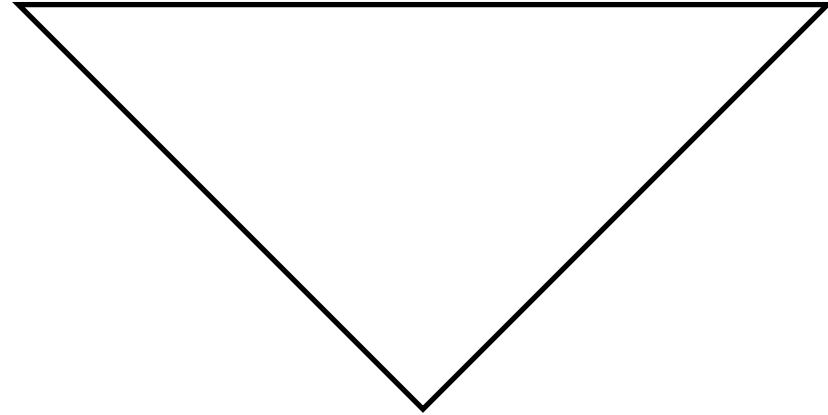



Problema 1

Que universo pode representar o diagrama de Carter-Penrose à direita?



Problema 2


Descreva brevemente a diferença entre a experiência (do ponto de vista de causalidade) nos universos (a), (b) e (c) em baixo.



(a)



(b)



(c)